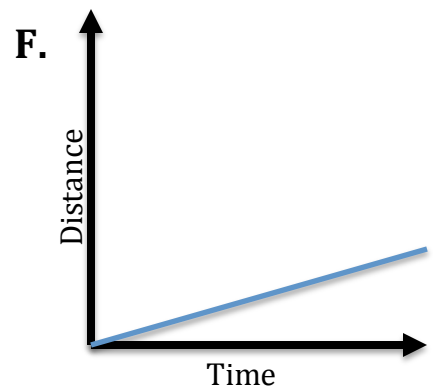
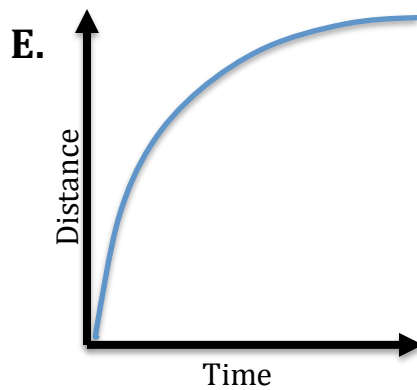
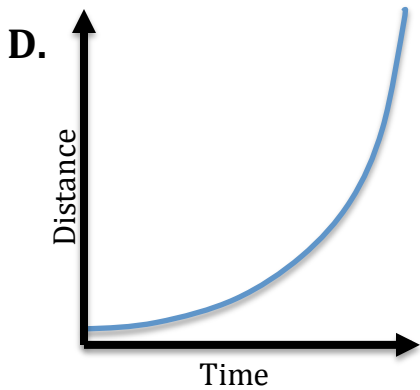
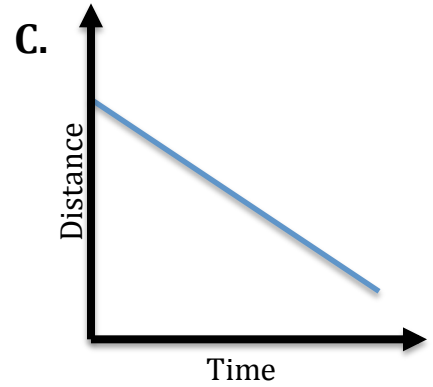
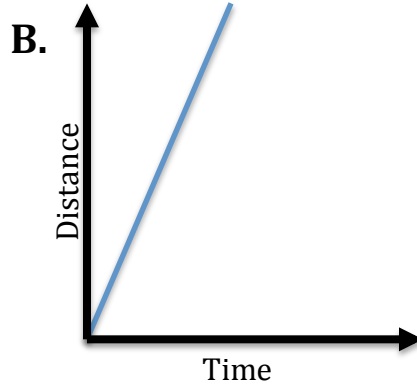
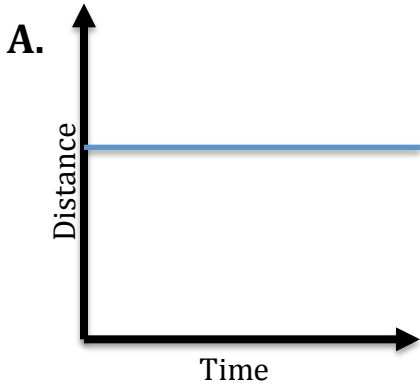


Motion Graph Analysis

Name _____ Per _____



Descriptions of Motion

1. Acceleration
2. Constant Speed (high rate of speed)
3. Constant Speed (low rate of speed)
4. Negative Acceleration (deceleration)
5. No Motion (stopped)
6. Moving Backwards (constant velocity in reverse)

Graph A matches description ____ because _____.

Graph B matches description ____ because _____.

Graph C matches description ____ because _____.

Graph D matches description ____ because _____.

Graph E matches description ____ because _____.

Graph F matches description ____ because _____.